

SARVODYA SCHOOL OF SCIENCE IMLOTA

Homework for Summer Vacation

Class – 3rd _____

Name _____

Roll No. _____

F_Name _____

Address _____

Summer Vacation will be from 02/06/2019 to 30/06/2019

The school shall reopen on 01/07/2019

Dear parents please motivate your ward for the following good habits :-

1. Brush Your Teeth Twice a day.
2. Shower twice a day during summer.
3. Clean your tongue by using a tongue cleaner.
4. Trim Your Nails Regularly.
5. Always Wish Your Parents, Relatives and Elders.
6. Don't skip breakfast.
7. Drink a Lot of Water Everyday.
8. Avoid Junk Food and Take Nutritious Diet.
9. Always Keep Yourself Neat & Clean.
10. Do not play on the roads.
11. Throw rubbish in the dustbin.
12. Develop good study habits and always tell the truth.
13. Be courteous and be honest.
14. Enjoy family meals together.
15. Gargle post meals.



Encourage your ward to speak in English or Hindi and help him in his/her homework,

Project : Prepare a project showing the life of people and animals living in hilly area.

Model : Make a model of an igloo with plaster of paris, cotton wool and thermocol.

Grade _____

Class In-charge _____

Gender

Date: _____

Masculine nouns are words used for all males. Feminine nouns are words used for all females.

1. Fill in the blanks with suitable masculine nouns and feminine nouns:

- (a) Ladies and _____, please clap your hands for the next performer.
- (b) Mr and Mrs Gupta went for a movie with their son and _____.
- (c) The priest blessed the bride and the _____ for a happy married life.
- (d) How many _____ and girls were present in the meeting?
- (e) My landlord and _____ are going for a vacation.
- (f) There were lots of horses and _____ in the stable.
- (g) The king and _____ of England visited India in the month of July.

2. Write the opposite gender:

- (a) Husband _____
- (b) Host _____
- (c) Princess _____
- (d) Girl _____
- (e) Lioness _____
- (f) Poet _____
- (g) Emperor _____



3. Complete the sentences by changing the gender of the words given in the brackets:

- (a) The (**hero**) _____ was ready for the shoot.
- (b) Beware of the (**tiger**) _____ !
- (c) The (**headmaster**) _____ conducted the assembly.
- (d) The (**salesman**) _____ looked tired.
- (e) The (**duchess**) _____ shook hands with the queen.

Articles

Date: _____

There are three articles 'a', 'an' and 'the'.

1. Fill in the blanks with suitable articles:

- (a) _____ book you wanted is not available.
- (b) Which is _____ largest flower?
- (c) Reena's father is _____ lawyer.
- (d) Varun is _____ honest child.
- (e) My cousin is _____ Air Force pilot and flies fighter jets.
- (f) We all watch _____ evening news together.

2. Write each sentence correctly with the correct article:

- (a) I held a octopus in my hand.

- (b) An car is parked in front of an bank.

- (c) We have the kennel for our dog.

- (d) A water is clean.

- (e) What a untidy room!

- (f) An Earth is the only planet with life.

Conjunctions

Date: _____

Conjunctions are words that join words or sentences.

1. Complete the sentences with 'and', 'but', 'or', 'so':

- (a) Karan wants some bread _____ butter.
- (b) Nakul wants to be a doctor _____ a scientist.
- (c) Are you going by train _____ by car?
- (d) Meeha is a good singer _____ a poor dancer.
- (e) Neha rang the doorbell _____ no one answered.
- (f) I was unwell _____ I was absent yesterday.
- (g) We rushed to the airport _____ the flight had taken off.

2. Fill in the blanks with the conjunction 'when' or 'while' correctly:

- (a) Bring a packet of cheese cubes _____ you go to the market.
- (b) They made sandcastles _____ their mother walked on the beach.
- (c) Nisha looked happy _____ she stepped out of her house early in the morning.
- (d) Trisha baked a cake _____ her brother studied.
- (e) Switch off the lights _____ you leave the room.

3. Read the given sentences and underline the conjunctions:

- (a) Kunal and I went to the park after school.
- (b) Anita is a vegetarian so she doesn't eat meat.
- (c) Would you like pears or do you prefer oranges?
- (d) Neena knocked on the door, but no one answered.
- (e) Jai went to the beach and surfed all day.


जिन शब्दों से काम का करना या होना प्रकट हो, वे क्रिया कहलाते हैं।

1. चित्र देखकर लिखिए किसमें कौन-सी क्रिया हो रही है-



2. क्रिया शब्दों पर गोला (○) लगाइए-

- (क) शेर हिरण के पीछे भाग रहा है।
- (ख) बालक पलंग पर सो रहा है।
- (ग) प्रतीक गाना गा रहा है।
- (घ) पिता जी खाना खा रहे हैं।
- (ङ) निहिर साइकिल चला रहा है।



3. नीचे दिए गए वाक्यों में प्रयुक्त क्रियाओं के भेद सकर्मक हैं या अकर्मक लिखिए-

- (क) पिता जी अखबार पढ़ रहे हैं।
- (ख) राम हँसता है।
- (ग) धोबिन कपड़े धो रही है।
- (घ) नौकर सो रहा है।
- (ङ) राधिका नाचती है।

.....

.....

.....

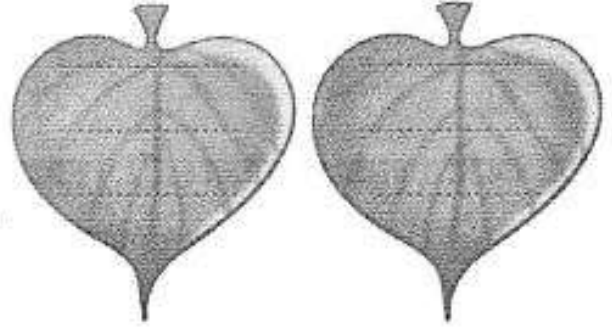

.....

.....

जिस शब्द से संज्ञा के एक या अनेक होने का पता चलता है, उसे वचन कहते हैं।

1. फूल पर एकवचन शब्द और पत्तियों पर बहुवचन शब्द छाँटकर लिखिए-

बातें • रजाई • तितलियाँ • लड्डू • पुस्तकें • छात्रा
टोपियाँ • बहन • नदियाँ • उँगली • औरतें



2. सही कथन पर (✓) तथा गलत कथन पर (X) का निशान लगाइए-

(क) वचन संज्ञा शब्दों की संख्या बताते हैं।

(ख) वचन चार प्रकार के होते हैं।

(ग) एक से अधिक संख्या बताने वाले शब्दों को एकवचन कहते हैं।

(घ) कुछ शब्द सदा एकवचन के रूप में प्रयोग किए जाते हैं।

3. उचित शब्द चुनकर रिक्त स्थानों की पूर्ति कीजिए-

एकवचन • दो • बहुवचन • वचन

(क) एक या अनेक का ज्ञान कराने वाले शब्द को कहते हैं।



(ख) वचन प्रकार के होते हैं।

(ग) एक संख्या का ज्ञान कराने वाले शब्द कहलाते हैं।

(घ) एक से अधिक संख्या का ज्ञान कराने वाले शब्द कहलाते हैं।

समान या एक जैसा अर्थ प्रकट करने वाले शब्द पर्यायवाची शब्द कहलाते हैं।

1. नीचे दिए गए चित्रों को देखकर उनके दो-दो पर्यायवाची शब्द लिखिए-



.....
.....

.....
.....

.....
.....

2. सही पर्यायवाची शब्द पर गोला (○) लगाइए-

पुष्प - पादप, पवन, सुमन

अग्नि - खग, पावक, रजनी

पृथ्वी - शशि, जलद, धरती

मित्र - नीरज, विहग, सखा

गाय - धेनु, वनराज, नरेश

समुद्र - भुजंग, नरेश, सिंधु

3. मिलान कीजिए-

(क) साँप

(i) ध्वज

(ख) झंडा

(ii) समीर

(ग) रात

(iii) भुजंग

(घ) बादल

(iv) रात्रि

(ङ) वायु

(v) जलधर



1. Write the numeral for each of the following. One has been done for you:

- (a) $9 \times 1000 + 8 \times 100 + 5 \times 10 + 3 \times 1$
- (b) $4 \times 1000 + 2 \times 100 + 4 \times 10 + 6 \times 1$
- (c) $6 \times 1000 + 2 \times 100 + 3 \times 10 + 7 \times 1$
- (d) $8 \times 1000 + 0 \times 100 + 4 \times 10 + 3 \times 1$
- (e) $7 \times 1000 + 4 \times 100 + 0 \times 10 + 3 \times 1$
- (f) $4 \times 1000 + 0 \times 100 + 0 \times 10 + 4 \times 1$
- (g) $3 \times 1000 + 0 \times 100 + 4 \times 10 + 0 \times 1$
- (h) $5 \times 1000 + 0 \times 100 + 0 \times 10 + 8 \times 1$

Thousands	Hundreds	Tens	Ones
9	8	5	3

2. Write the following numbers in figures. One has been done for you:

- (a) Four thousand seven hundred and fifty two
- (b) Five thousand nine hundred and thirty three
- (c) Eight thousand five hundred and sixty two
- (d) Six thousand two hundred and eighty four
- (e) Seven thousand three hundred and two
- (f) Two thousand two hundred five
- (g) Two thousand sixty seven
- (h) One thousand thirty nine
- (i) Five thousand eight
- (j) Nine thousand nine hundred six
- (k) Four thousand ten
- (l) Two thousand three hundred twenty

Thousands	Hundreds	Tens	Ones
4	7	5	2

Ascending and Descending Order of Numbers

Date: _____

1. Write the following numbers in ascending order. The first one has been done for you:

- | | | | | | | |
|-----|--------------|--------|--------|--------|--------|-------|
| (a) | 2234 to 2238 | 2234, | 2235, | 2236, | 2237, | 2238 |
| (b) | 4099 to 4103 | _____, | _____, | _____, | _____, | _____ |
| (c) | 3298 to 3302 | _____, | _____, | _____, | _____, | _____ |
| (d) | 7269 to 7273 | _____, | _____, | _____, | _____, | _____ |
| (e) | 6354 to 6358 | _____, | _____, | _____, | _____, | _____ |
| (f) | 8379 to 8383 | _____, | _____, | _____, | _____, | _____ |
| (g) | 7365 to 7369 | _____, | _____, | _____, | _____, | _____ |

2. Write the following numbers in descending order. The first one has been done for you:

- | | | | | | | | |
|-----|--------------|--------|--------|--------|--------|--------|-------|
| (a) | 5702 to 5697 | 5702, | 5701, | 5700, | 5699, | 5698, | 5697 |
| (b) | 8303 to 8298 | _____, | _____, | _____, | _____, | _____, | _____ |
| (c) | 4109 to 4104 | _____, | _____, | _____, | _____, | _____, | _____ |
| (d) | 6670 to 6665 | _____, | _____, | _____, | _____, | _____, | _____ |
| (e) | 2384 to 2379 | _____, | _____, | _____, | _____, | _____, | _____ |
| (f) | 3319 to 3314 | _____, | _____, | _____, | _____, | _____, | _____ |

3. Give three numbers that come in between each of the following two numbers. The first one has been done for you:

- | | | | | | |
|-----|------|-------|-------|-------|------|
| (a) | 6225 | 6226 | 6227 | 6228 | 6229 |
| (b) | 4138 | _____ | _____ | _____ | 4134 |
| (c) | 2712 | _____ | _____ | _____ | 2716 |
| (d) | 9816 | _____ | _____ | _____ | 9820 |
| (e) | 7423 | _____ | _____ | _____ | 7419 |
| (f) | 5506 | _____ | _____ | _____ | 5510 |
| (g) | 3856 | _____ | _____ | _____ | 3860 |

Fill in the boxes. One has been done for you:

1.

$$10 \times 10 = \boxed{100}$$

$$\boxed{} \times 8 = 56 \quad 5 \times \boxed{} = 35$$

$$\boxed{} \times 2 = 38 \quad 2 \times \boxed{} = 18$$

$$\boxed{} \times 4 = 40 \quad 6 \times \boxed{} = 54$$

$$15 \times 8 = \boxed{}$$

2.

$$8 \times 8 = \boxed{}$$

$$\boxed{} \times 6 = 18 \quad 8 \times \boxed{} = 24$$

$$\boxed{} \times 3 = 21 \quad 7 \times \boxed{} = 49$$

$$\boxed{} \times 5 = 20 \quad 5 \times \boxed{} = 45$$

$$20 \times 5 = \boxed{}$$

3.

$$12 \times 8 = \underline{\hspace{2cm}}$$

$$\underline{\hspace{2cm}} \times 15 = 45 \quad 16 \times \underline{\hspace{2cm}} = 80$$

$$\underline{\hspace{2cm}} \times 17 = 51 \quad 12 \times \underline{\hspace{2cm}} = 60$$

$$\underline{\hspace{2cm}} \times 19 = 57 \quad 18 \times \underline{\hspace{2cm}} = 90$$

$$16 \times 9 = \underline{\hspace{2cm}}$$

4.

$$9 \times 9 = \boxed{}$$

$$\boxed{} \times 6 = 96 \quad 8 \times \boxed{} = 64$$

$$\boxed{} \times 13 = 117 \quad 7 \times \boxed{} = 14$$

$$\boxed{} \times 9 = 162 \quad 9 \times \boxed{} = 63$$

$$13 \times 8 = \boxed{}$$

Fill in the blanks. One has been done for you:

1.

$49 \div 7 = 7$

9.

$36 \div 3 = \quad$

2.

$36 \div 6 = \quad$

10.

$54 \div 9 = \quad$

3.

$30 \div 5 = \quad$

11.

$80 \div 10 = \quad$

4.

$60 \div 6 = \quad$

12.

$45 \div 15 = \quad$

5.

$68 \div 17 = \quad$

13.

$80 \div 16 = \quad$

6.

$14 \div 2 = \quad$

14.

$32 \div 8 = \quad$

7.

$15 \div 5 = \quad$

15.

$72 \div 8 = \quad$

8.

$108 \div 12 = \quad$

16.

$104 \div 13 = \quad$

Living and Non-living Things

Date: _____

1. Fill the table with cross (X) and tick (✓) to compare living and non-living things:

Characteristics of living things	Cow	Table	Rose plant	Mountain	Yak
Breathes					
Needs food					
Reproduces					
Grows					
Moves					
Responds					

2. Name two things:

- (a) Plants that respond _____
- (b) Carnivores _____
- (c) Herbivores _____
- (d) Lays eggs _____
- (e) That breathe _____
- (f) That grow _____

3. Answer the following questions:

- (a) What is the difference between natural and man-made things?

- (b) Why do living things need food?

- (c) Give any two features of living things.

- (d) Why do animals move from one place to another?

1. Match the following:

COLUMN A

- (a) It absorbs water from the soil.
- (b) It grows into a new plant.
- (c) It makes food for the plant.
- (d) It carries food and water to different parts of a plant.
- (e) It is the most beautiful part of a plant.

COLUMN B

- (i) Stem
- (ii) Root
- (iii) Flower
- (iv) Leaf
- (v) Seed

2. Answer the following questions:

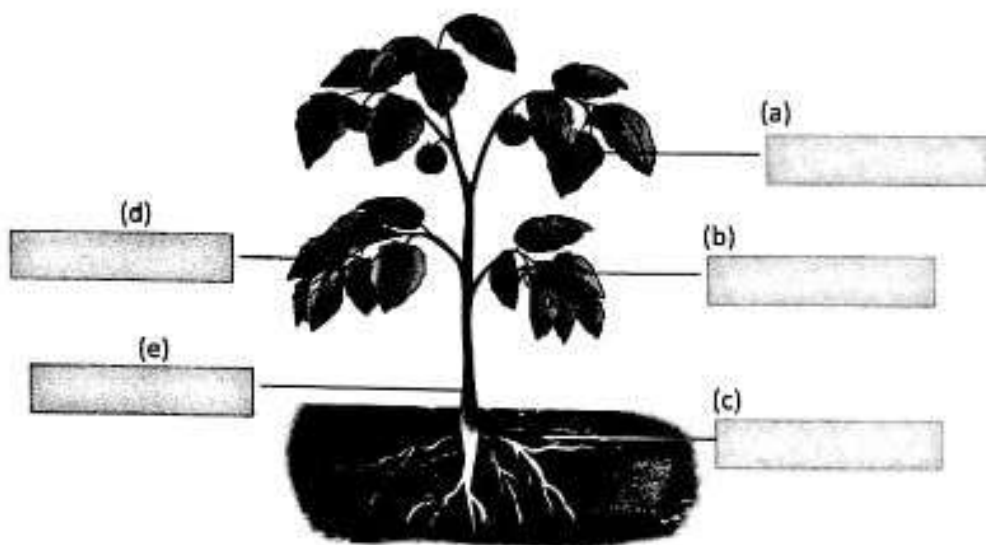
(a) State any two functions each of:

(i) Root _____

(ii) Stem _____

(b) Why are leaves called the 'kitchen of a plant'?

3. Label the following diagram:



1. Match the following:

COLUMN A

- (a) Duck
- (b) Parrot
- (c) Hawk
- (d) Robin
- (e) Hummingbird

COLUMN B

- (i) Long and pointed beak
- (ii) Flat beak
- (iii) Curved beak
- (iv) Hooked beak
- (v) Short, hard and sharp beak

2. Sort out birds according to the different shapes of their beaks:

- Sunbird • Hawk • Pigeon • Duck • Hoopoe • Parrot • Crane
- Hummingbird • Spoonbill • Eagle • Sparrow • Woodpecker

Beaks	Bird's name
Long and pointed beak	
Broad and flat beak	
Curved beak	
Hooked beak	
Short and sharp beak	
Spoon-shaped beak	
Chisel-shaped beak	

3. Write 'True' or 'False':

- (a) Bones of birds are strong and heavy.
- (b) Hummingbird has a flat beak to suck nectar.
- (c) Ostrich is a flightless bird.
- (d) Perching birds have talons.
- (e) Flesh-eating birds have webbed feet.
- (f) Hen is a scratching bird.
- (g) Penguins live in very hot places.

Note: - Do the holiday homework in a separate note book, Revise all syllabus of all subjects discussed in class during the months of April & May.

English – Write one thought or good habit daily in cursive handwriting. Write few lines on your family paste a family photo. Write and learn all word meanings done in class. Write second and third forms of given verbs and use this verbs in your on sentence also.

Verbs - Ask, Break, Call, Bless, Do, Dry, Find, Know, Obey, Bite, Bark, Fall, Count, Fly, Eat, Try, Cut, Write, Read, Learn, Advice, Adopt, Play, See, Think, Cook, Drink, Help, Say, Run, Jump, Count, Take, Use, Abuse, sleep.

Project - Show the all components of part of speech with the help of diagram with example.

हिन्दी – प्रत्येक मात्रा के चार भाब्द प्रतिदिन लिखें व पढ़ें। कोई दो रोचक कहानियाँ लिखें व प्रार्थना सभा हेतु याद करें। किन्हीं दो महापुरुशों का जीवन चरित्र लिखें व चित्र लगाएँ।

संज्ञा, सर्वनाम, वि०शेषण, क्रिया की परिभाशा, भेद व उदाहरण सहित लिखें व याद करें।

Maths - Do some questions from Ch. - I.

Q. 66, 67, 68, 69, 70, 71, 74, 75, 76, 77, 78, 81, 82, 83, 85.

Do question Bag on page no.- 34, 35, 36, 37, 38, 43, 44.

Activity - Make the shape, square, rectangle, triangle, circle and cuboid with the help of cardboard.

Science - Make a First Aid Box including necessary things.

Collect Information :- Go to a water body near your place. Observe how people use water for different activities Write a short note on water pollution.

Make a list of your needs and wants (at least five) with pictures.

GK- Write the name of 20 countries with their capitals and National Game.

Reuse the waste material and make something new like wall hanging, flower pot, pen stand etc.

Social Sci - Get information and collect some pictures about the various animals and plants found in the Great Indian Desert. You may consult newspapers, magazines and other books from syllabus. Paste the photos and the information on a chart paper.

Computer - How computer is helpful in our daily life. Collect pictures and information.

Model - Make a model of computer or ATM machine.

Dear parents: - Download worksheet or assignments from school website www.sarvodyascience.com or app :- Csonline School Education for extra practice.